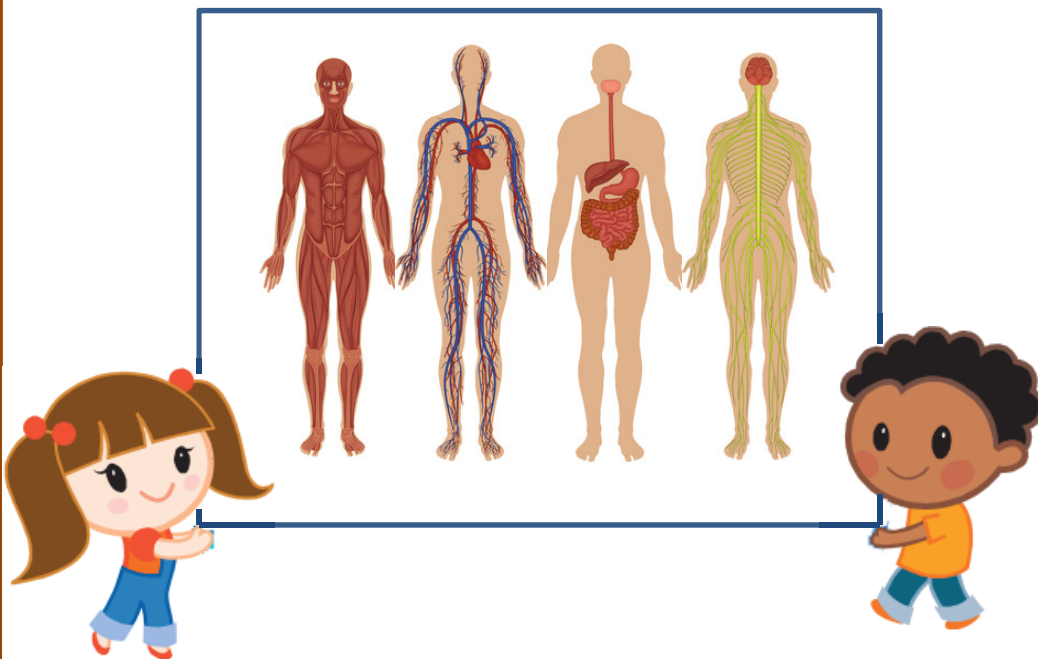



# My Body - Organ Systems

Worksheets For Grades 3 & 4





## TOC of Complete Version



Topic	Page
Introduction to Organ Systems	3
The Organ Systems	4-5
Name the Organ System	6
The Skeletal System	7
Parts of the Skeletal System	8
The Muscular System	9
The Digestive System	10
Parts of the Digestive System	11
The Respiratory System	12
Parts of the Respiratory System	13
The Nervous System	14
The Circulatory System	15
The Excretory System	16
Parts of an Organ System	17
Which Organ System?	18
Correct the Sentences	19
Organ System Word Search	20
Parts of an Organ System Picture Match	21
Pictures for Activities	22-23
Answer Keys	24 -42

Name \_\_\_\_\_

Date \_\_\_\_\_

## The Digestive System



What is the main function of the digestive system?

---

---

---

---

The digestive system starts in the \_\_\_\_\_.

Food is broken into smaller pieces by chewing with our \_\_\_\_\_. The food gets mixed with a juice called \_\_\_\_\_ in the mouth.

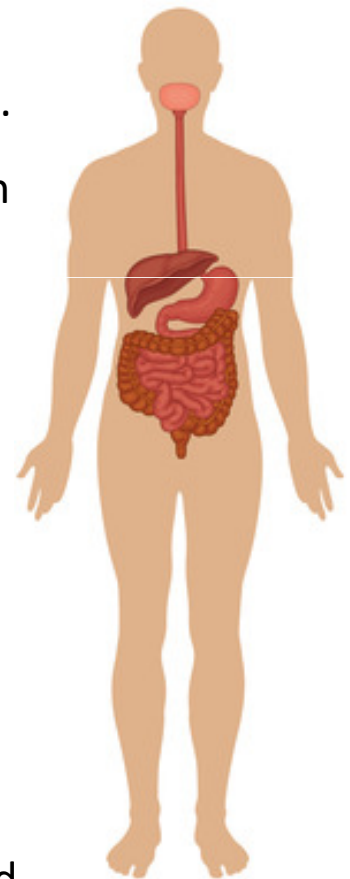
The food then goes through the \_\_\_\_\_ to the \_\_\_\_\_.

Here it mixes with the digestive juices.

Food is then passed into the \_\_\_\_\_.

Here nutrients from the food are taken in by blood.

The undigested food passes to the \_\_\_\_\_ & finally is thrown out of the body through the \_\_\_\_\_.



Name \_\_\_\_\_

Date \_\_\_\_\_

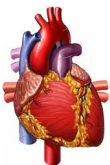
### Parts of an Organ System



For each of the sentences below, identify organ system it refers to.



Organ System	Parts
Neural System	
Respiratory System	
Digestive System	
Circulatory System	
Skeletal System	
Excretory System	




Name \_\_\_\_\_

Date \_\_\_\_\_

### Correct the Sentences

Each of the sentences below has a mistake. Underline the mistake and write the correct word in the blank provided along with.



Saliva is found in the stomach.

\_\_\_\_\_

Blood vessels are like telephone lines between the sense organs and the brain.

\_\_\_\_\_

Air goes from the food pipe to the lungs.

\_\_\_\_\_

Nutrients are taken by blood mainly from the large intestines.

\_\_\_\_\_

Liver produces urine.

\_\_\_\_\_

The heart pumps blood which is transported to all parts of the body through nerves.

\_\_\_\_\_

The lungs exhale oxygen.

\_\_\_\_\_

The respiratory system controls all our actions.

\_\_\_\_\_

The skeletal system helps in movement.

\_\_\_\_\_