

Time

The Hour, Half Past, Quarter Past,
5 Minute Intervals & Time Formats


Worksheets For Grades 1, 2 & 3





TOC of Complete Version

Table of Contents



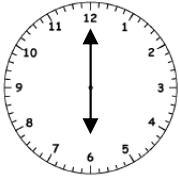
Topic	Page
The Hour- Poster	3
The Hour- Tell and Show the Time	4-5
Fun at the Fair	6
Half Past- Poster	7
Half Past - Tell and Show the Time	8-9
Victoria Zoo Feeding Times	10
Quarter Past - Poster	11
Quarter To - Poster	12
Quarter To, Quarter Past – Tell & Show the Time	13-14
Saturday TV Shows	15
Jane’s Morning Schedule	16
John’s School Time- Table	17
Start and End Times	18-19
Facts About the Clock’s Hands- Poster	20
Counting Minutes in the Hour	21
5 Minute Intervals – Show the Time	22
A.M or P.M.	23
Sense of Time	24
Early, On time and Late	25
The 24 Hour Time Format - Poster	26
24 Hour Time Format- Tell & Show the Time	27-28
Tell the Time Board Game	29
Make Your Own Clock	30-31
Answer Keys	32- 42

Name _____

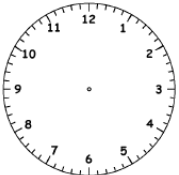
Date _____


Jane's Morning Schedule

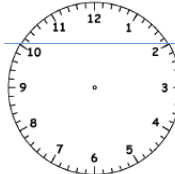
For the story below, draw the hands in the clocks to tell the right time.


Jane wakes up at  every morning.

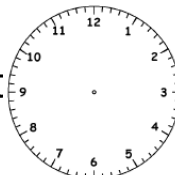
After waking up, she takes **30 minutes** to brush , bathe & get dressed.

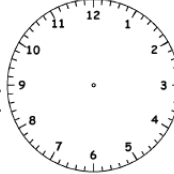
The time is now  She then has a quick breakfast for

15 minutes. She finishes breakfast at 

She catches a bus to school **15 minutes** later at 

The bus reaches school after **half- an hour** at 

Jane stays in school for **six hours.** She leaves school at 

She reaches back home after **30 minutes** at 



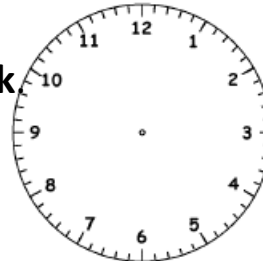
Start and End Times

Draw the start and end times according to the following statements.

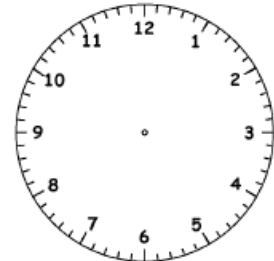


Ann starts breakfast at **7 o'clock**.
She finishes in **15 minutes**.

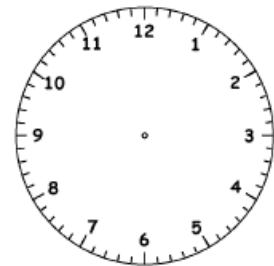
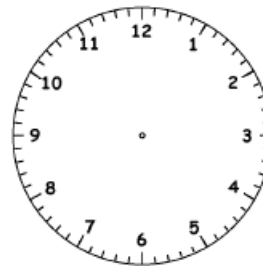
Start



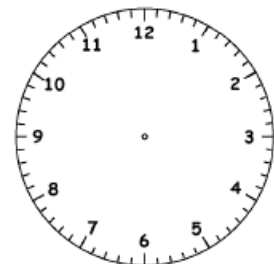
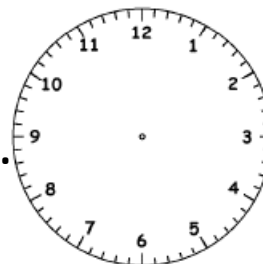
End




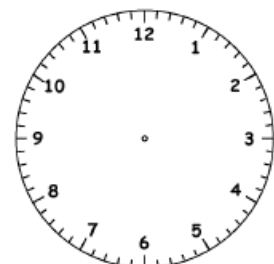
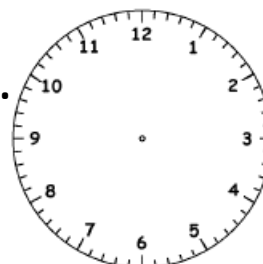
The movie started at **6:30**.
It went on for **2 hours**.



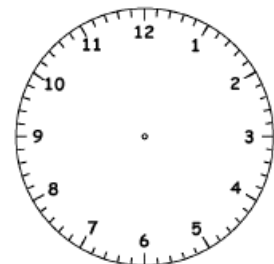
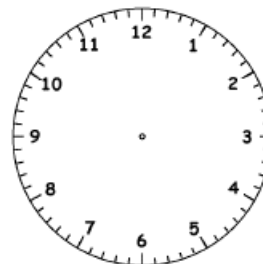
The piano class is for
45 minutes. It ends at **3:15**.



Tim finished baking at **8:00**.
The cake took **30 minutes**
to bake.



The train starts at **5:20**. It
reaches its destination in
5 hours.

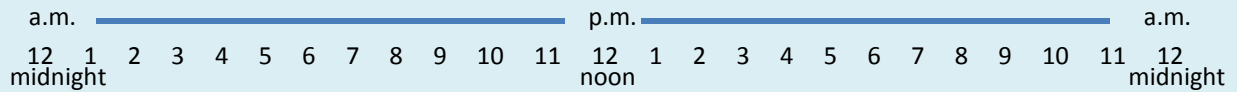


Name _____










Date _____

A.M. or P.M.

There are 24 hours in a day. The first 12 hours are a.m. and the next 12 hours are p.m.
 Time changes from a.m. to p.m. to a.m. at 12. When time changes from p.m. to a.m. , the date changes.




For the actions below, circle a.m. or p.m.

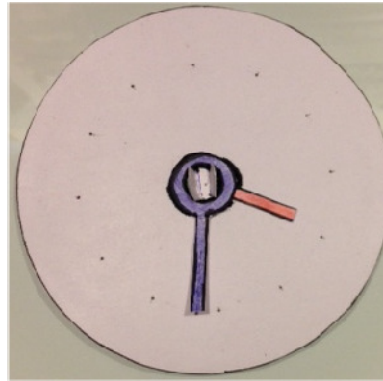

<p>Eating breakfast</p>  <p>7:00 a.m. p.m.</p>	<p>Teaching in school</p>  <p>9:00 a.m. p.m.</p>	<p>Swimming</p>  <p>3:00 a.m. p.m.</p>
<p>Gazing stars</p>  <p>9:00 a.m. p.m.</p>	<p>Playing piano</p>  <p>1:00 a.m. p.m.</p>	<p>Shopping</p>  <p>2:00 a.m. p.m.</p>
<p>Greet 'Good Morning'</p>  <p>8:00 a.m. p.m.</p>	<p>Greet 'Good Afternoon'</p>  <p>2:00 a.m. p.m.</p>	<p>Sleeping</p>  <p>12:00 a.m. p.m.</p>

Create your own clock with moving hands and no pins!

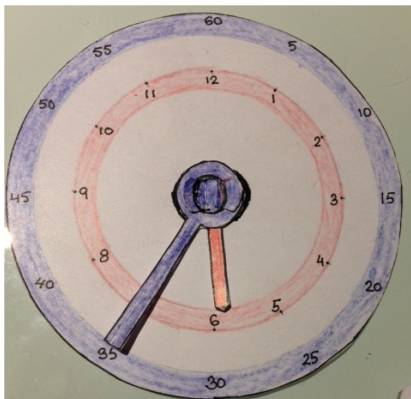
1. Trace out or print the outlines provided on page 31 onto a slightly stiff paper.
2. Cut out the circle only along the lines.
3. Lift the centre flaps . Your clock cutout should look like this.



4. Cut out the hands. Slip the hands into the clock base.



5. Decorate your clock with numbers and colors.



I have shown both hour and minute numbers on my clock.